



Year 5 – week beginning 11th May

<p>Reading</p>	<ul style="list-style-type: none"> Read for at least twenty minutes each day. Make sure you are reading a range of different genres and try and include some non-fiction too! You may want to read some of these short stories and poems https://literacytrust.org.uk/family-zone/9-12/book-hopes/ Have a go at any of the tasks on the reading rainbow that you haven't yet completed.
<p>Spelling</p>	<ul style="list-style-type: none"> I have attached 3 SPaG mats (Spelling, Punctuation and Grammar). The number of stars at the bottom indicate the level of difficulty (3 stars is trickier). Make sure you challenge yourself! <div style="display: flex; justify-content: space-around;"> <div data-bbox="344 475 757 746"> <p>Year 5 Spring Term 1</p> <p>a Can you rewrite the sentence below as direct speech? The shop assistant told him that the coat was six pounds exactly.</p> <p>b Write a sentence using the commonly-confused homophone word 'practise'.</p> <p>c Students Cook & Serve Grandparents! Why is this newspaper headline ambiguous?</p> <p>d Mr Whizzo has accidentally jumbled up two words containing the 'ough' letter string. Can you help him unjumble them? tqphatrh grouph</p> <p>e Underline the adverb of possibility or modal verb in the following sentence and say what type of word you have underlined. a) Bridget might be able to attend the party. b) Perhaps Joe had lost his wallet when he was at the shopping centre.</p> <p>f Insert commas around the relative clause in this sentence and underline the relative pronoun. The war veterans who were now all in their eighties paraded proudly down the street.</p> </div> <div data-bbox="808 475 1198 746"> <p>Year 5 Spring Term 1</p> <p>a That'll be six pounds exactly! Can you write the shop assistant's words in a direct speech sentence with the reporting clause before the inverted commas?</p> <p>b Write two separate sentences using the commonly-confused homophone words 'practise' and 'practice'.</p> <p>c Students Cook & Serve Grandparents! Why is this newspaper headline ambiguous? Could you rewrite the headline so it is unambiguous?</p> <p>d Mr Whizzo has accidentally jumbled up two words containing the 'ough' letter string. All the letters from the two words are mixed together. Can you help him to unjumble them? tqphatrhgrouph</p> <p>e Underline the adverb of possibility or modal verb in the following sentence and say what type of word you have underlined. a) Bridget might be able to attend the party. b) Perhaps Joe had lost his wallet when he was at the shopping centre. c) Maybe Mrs Baker would win the cake competition this year at the party.</p> <p>f Insert commas around the relative clause in this sentence. The war veterans who were now all in their eighties paraded proudly down the street.</p> </div> </div>
<p>Writing</p>	<ul style="list-style-type: none"> Log onto PurpleMash and read the assigned chapters of Our Big Kitchen and complete the tasks set. Click on the '2do' button to find the work. <div style="display: flex; align-items: center;">  <div style="margin-left: 20px;"> <p>Complete the Using Apostrophes lesson and activities https://www.bbc.co.uk/bitesize/articles/zdstbtk</p> </div> </div>
<p>Maths</p>	<ul style="list-style-type: none"> Keep up the good work with times table rockstars! I can see how many of you are improving with your answer time per question! Keep it up! You have been set 3 challenges on www.mymaths.co.uk Don't forget if you want more of a challenge you can choose any of the exercises/lessons to have a go at!

Presents

Gurmit paid £21 for five presents.

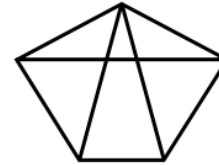


- For A and B he paid a total of £6.
- For B and C he paid a total of £10.
- For C and D he paid a total of £7.
- For D and E he paid a total of £9.

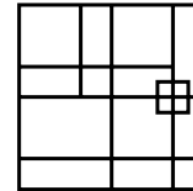
How much did Gurmit pay for each present?

Spot the shapes 2

1. How many triangles can you count?



2. How many squares can you count?



- 3. Draw your own diagram to count triangles.
Don't use too many lines!
How many triangles can a friend find?
Can you find more?

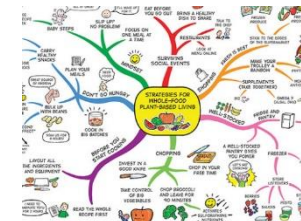
Have a go at these challenges!

Curriculum Task

This half term we would have been learning about The Maya. Watch the following clips by using the link below and make notes. You can organise your notes however you wish but see if you can answer the following questions:

<https://www.bbc.co.uk/bitesize/topics/zq6svcv>

- Who were the ancient Maya? Where did they live and what did they do?
- What was life like for the Mayans? What was family life like?
- What was their diet like?
- What still remains of the Mayans?



Create a mindmap of all the things you find out. Can you use other websites to search for information?

Don't forget the following websites are useful too!

<https://www.bbc.co.uk/bitesize>

<https://www.thenational.academy/online-classroom>